



**PAMIBIA UNIVERSITY  
OF SCIENCE AND TECHNOLOGY**

**FACULTY OF COMMERCE, HUMAN SCIENCES & EDUCATION**

**DEPARTMENT OF GOVERNANCE & MANAGEMENT SCIENCES**

<b>QUALIFICATION:</b> Bachelor of Business and Information Administration	
<b>QUALIFICATION CODE:</b> 07BBIA	<b>LEVEL:</b> 5
<b>COURSE CODE:</b> BIS521S	<b>COURSE NAME:</b> Business Information Systems 1B
<b>SESSION:</b> January 2023	<b>PAPER:</b> Theory
<b>DURATION:</b> 2 Hours	<b>MARKS:</b> 100

<b>2<sup>nd</sup> OPPORTUNITY EXAMINATION QUESTION PAPER</b>	
<b>EXAMINER(S)</b>	Ms. S. Klaassen Ms. A. Schroeder
<b>MODERATOR:</b>	Dr. N. Angula

<b>INSTRUCTIONS</b>
<ol style="list-style-type: none"><li>1. Answer ALL the questions.</li><li>2. Detach page 2 from your question paper and insert it in your answer script.</li><li>3. Read questions carefully before answering.</li><li>4. Please number your answers clearly.</li><li>5. Make sure your student number appears on the answering script.</li></ol>

**PERMISSIBLE MATERIALS**

1. Pen, pencil, ruler and eraser

**THIS QUESTION PAPER CONSISTS OF 8 PAGES** (Including this front page)

**QUESTION 1: MULTIPLE CHOICE QUESTIONS**

**[20]**


Choose the letter from the options that best completes the following sentences.  
Use the answer sheet on page 2 and detach it from the question paper then insert in the examinations answer script.

- 1.1 Uses of voice input include:
- A. Internet messaging that supports voice conversations
  - B. VOIP - enables users to make calls over the internet. To make a call, a telephone is connected to a network cable, rather than a phone line or a call is made over a computer. Skype is a popular example
  - C. Video calls
  - D. All the above

- 1.2 \_\_\_\_\_ cables are used for audio/video transmission.
- A. DVI
  - B. HTTP
  - C. HDMI
  - D. DVD


- 1.3 \_\_\_\_\_ scanners identify a person by taking measurements of a person's \_\_\_\_\_. For example, the distance between the person's chin, eyes, nose, and mouth. What is the missing word?
- A. Hand
  - B. Face
  - C. Nose
  - D. Mouth

- 1.4 Identify the equipment in the picture underneath.



- A. Barcode reader
  - B. Flatbed scanner
  - C. RFID reader
  - D. None of the above
- 1.5 The most common method of entering text and numerical data into a computer system is using a \_\_\_\_\_.
- A. Plotter
  - B. Printer
  - C. Keyboard
  - D. Scanner

- 1.6 \_\_\_\_\_ protects your computer or computer network from any unwanted intrusion in the form of cyber-criminals on the internet?
- A. Hardware
  - B. Firewall
  - C. Home network
  - D. Software
  - E. Privacy
- 1.7 \_\_\_\_\_ is a type of malware that affects or infects a computer by altering the way the computer operates without the user's knowledge.
- A. Worm
  - B. Trojan horse
  - C. Virus
  - D. Malware
  - E. Spyware
- 1.8 Ensures that a user's information is protected and only allowing only an authorised party to view it.
- A. Malware
  - B. Output device
  - C. Storage device
  - D. Encryption
  - E. Software
- 1.9 \_\_\_\_\_ refers to the illegal distribution of software or illegal use of software if the software is protected by copyright.
- A. Information piracy
  - B. Privacy laws
  - C. Software piracy
  - D. Intellectual property rights
  - E. Digital certificate
- 1.10 Banks have introduced a two-step verification process to protect the financial information of their clients. An OTP is sent to the user's mobile device. What does OTP stand for?
- A. Over Time Pin
  - B. Open Token Pin
  - C. One Time Pin
  - D. Over Time Password
  - E. One Time Password
- 1.11 The main memory of the computer is called \_\_\_\_\_
- A. RAM
  - B. ROM
  - C. Virtual memory
  - D. GUI
- 1.12 \_\_\_\_\_ is an example of cloud storage.
- A. Micro Soft Word
  - B. Virtual Storage
  - C. Google Drive
  - D. Solid State Drive

- 1.13 Before you can install any other software, you need \_\_\_\_\_.  
A. A network  
B. Memory  
C. DVD's  
D. Operating System
- 1.14 The part of the hard disk where information is stored or retrieved is called a \_\_\_\_\_.  
A. Platter  
B. Track  
C. Cluster  
D. Head
- 1.15 \_\_\_\_\_ are a small text file that a web server stores on your computer. It contains data about you like your username, postal code, and viewing preferences.  
A. Spyware  
B. Cookies  
C. Adware  
D. Phishing
- 1.16 The speed of storage devices and memory is defined by access time. Access time measures \_\_\_\_\_.  
A. The length of a movie  
B. The speed of a game  
C. The amount of time it takes to locate an item on a storage device  
D. How fast the network is
- 1.17 Storage devices store information \_\_\_\_\_.  
A. Permanently  
B. While the computer is on  
C. When it is formatted  
D. In different compartments
- 1.18 What device is shown in the picture?  
A. 3-D printer  
B. Touch Screen  
C. Data printer  
D. Plotter
- 
- 1.19 All university students should guard against the practice of taking someone else's work or ideas and passing them off as their own, as it refers to \_\_\_\_\_.  
A. Cyber-crime  
B. Encryption  
C. Plagiarism  
D. Protection
- 1.20. This memory is extra memory and it's a small section of a hard disk space that is set up to imitate the computer's RAM.  
A. Virtual memory  
B. Cache memory  
C. Permanent memory  
D. Volatile memory

**QUESTION 2: SHORT ANSWER QUESTIONS**

10 x 2 (20)

Insert the correct term/phrase in the open space provided.

- 2.1 \_\_\_\_\_ is a general term used to describe the pain felt in muscles, nerves and tendons caused by repetitive movement and overuse.
- 2.2 \_\_\_\_\_ are commands that the user gives to the computer by means of using an input device.
- 2.3 \_\_\_\_\_ refers to a set of programmes that coordinate all the activities among the computer hardware devices and software programmes on a computer.
- 2.4 \_\_\_\_\_ devices read text printed with magnetised ink and converts characters into a form that the computer can process.
- 2.5 \_\_\_\_\_ refers to the time it takes to display an image or video on the screen.
- 2.6 \_\_\_\_\_ is an instructional tool that allows computer images to be displayed onto a board using a data projector.
- 2.7 \_\_\_\_\_ are available in black-and-white or colour and are more expensive than inkjet printers but print at a faster speed than ink-jet printers.
- 2.8 \_\_\_\_\_ reads hand-drawn marks such as small circles or rectangles on paper or electronically.
- 2.9 \_\_\_\_\_ is small metal or plastic device that looks like a tiny pen but uses pressure instead of ink.
- 2.10 \_\_\_\_\_ is a flatbed scanner that is composed of a glass pane under which there is a bright light which illuminates the pane, and a moving optical array in CCD scanning.



**QUESTION 3: STRUCTURED QUESTIONS**

[12]

- 3.1 John bought himself a computer recently and has come to you for advice on which keyboard is the best option between an “ergonomic keyboard” and a “gaming keyboard”. (6)
- 3.2 Mention the three (3) basic types of wireless connection available to users. (6)

**QUESTION 4: STRUCTURED QUESTIONS**

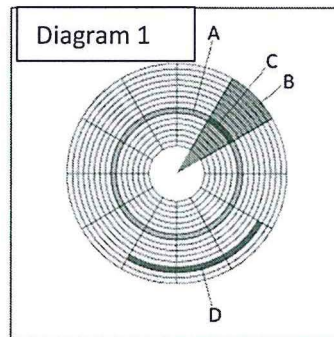
[12]

- 4.1 Name and explain between the “audio” and “video” basic two (2) different types of output. (4)
- 4.2 Discuss four (4) characteristics of a mobile printer. (8)

**QUESTION 5: STRUCTURED QUESTIONS**

[12]

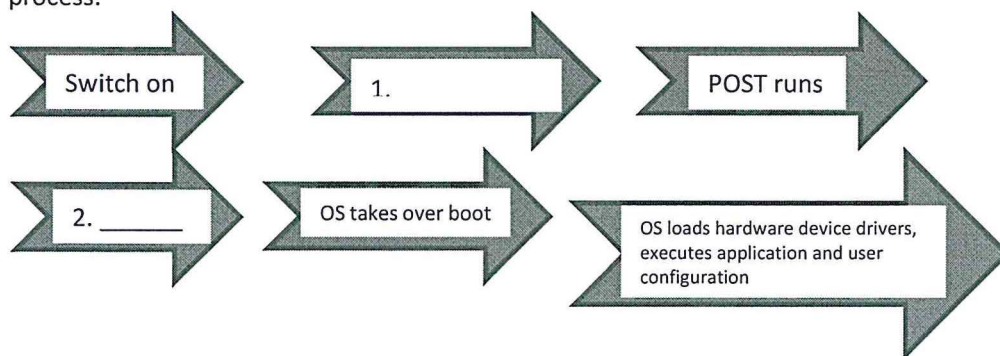
- 5.1 Hard drives can be internal or external to the computer device. Discuss four (4) advantages of external hard drives for users. (8)
- 5.2 Correctly label diagram 1 from A, B, C and D. (4)



**QUESTION 6: STRUCTURED QUESTIONS**

[12]

- 6.1 Define what an “operating system” is and list the types of operating systems and give an example of each type of operating system. (4)
- 6.2 Name and explain three (3) different ways of shutting down your PC. (6)
- 6.3 Complete the illustration by filling in the missing information at 1 and 2 to identify the boot process. (2)



**QUESTION 7: STRUCTURED QUESTIONS**

**[12]**

7.1 Name and discuss any five (5) offenders of cybercrime.

**(10)**

7.2 Identify and briefly explain the two (2) types of encryption methods in the information technology industry.

**(2)**

Detach page 2 from your question paper and insert it in your answer script.

STUDENT NO: \_\_\_\_\_ SURNAME & INITIALS: \_\_\_\_\_

<b>GROUP:</b> Full-time
----------------------------

<b>GROUP:</b> Distance
---------------------------

**QUESTION 1: MULTIPLE CHOICE QUESTIONS ANSWER SHEET [20]**

Choose the letter from the options that best completes the following sentences by inserting a cross at the correct letter.

1.1	A	B	C	D	E
1.2	A	B	C	D	E
1.3	A	B	C	D	E
1.4	A	B	C	D	E
1.5	A	B	C	D	E
1.6	A	B	C	D	E
1.7	A	B	C	D	E
1.8	A	B	C	D	E
1.9	A	B	C	D	E
1.10	A	B	C	D	E
1.11	A	B	C	D	E
1.12	A	B	C	D	E
1.13	A	B	C	D	E
1.14	A	B	C	D	E
1.15	A	B	C	D	E
1.16	A	B	C	D	E
1.17	A	B	C	D	E
1.18	A	B	C	D	E
1.19	A	B	C	D	E
1.20	A	B	C	D	E